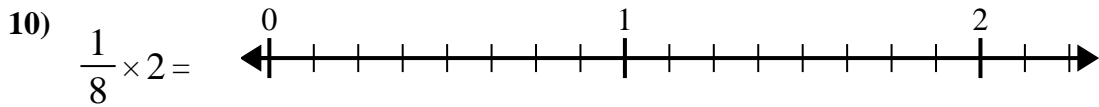
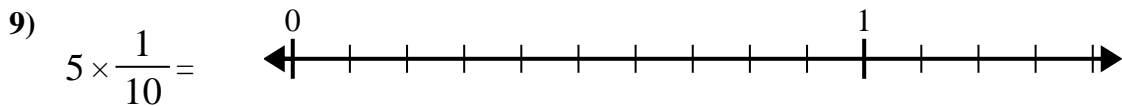
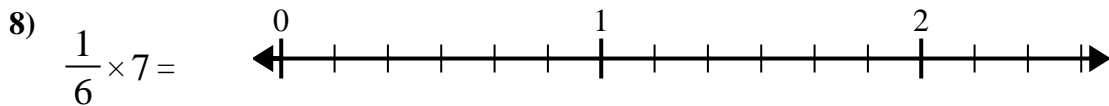
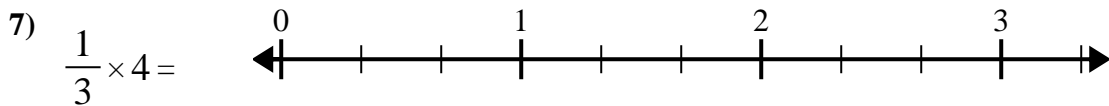
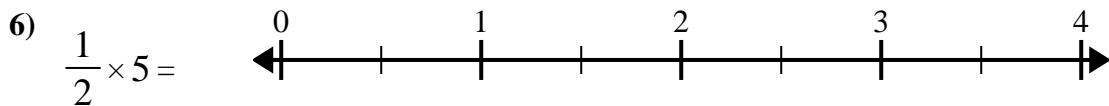
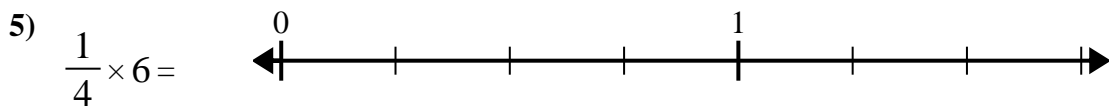
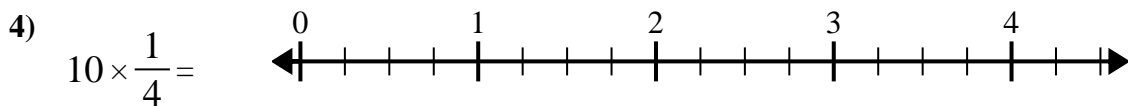
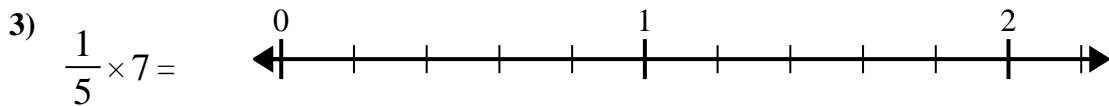
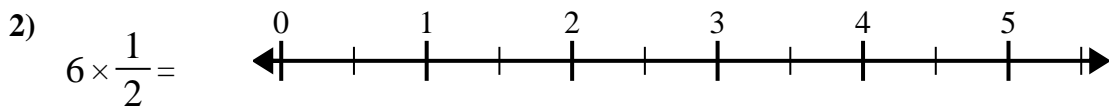
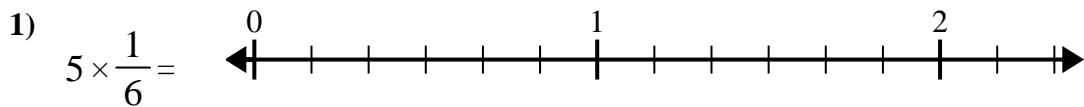




Use the numberline to solve.



Answers

1. _____

2. _____

3. _____

4. _____

5. _____

6. _____

7. _____

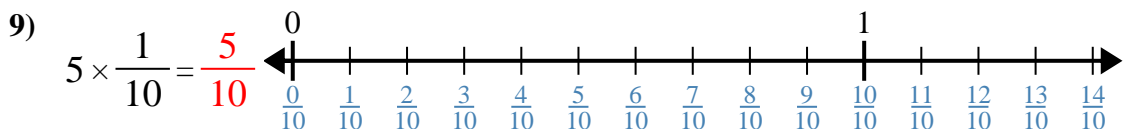
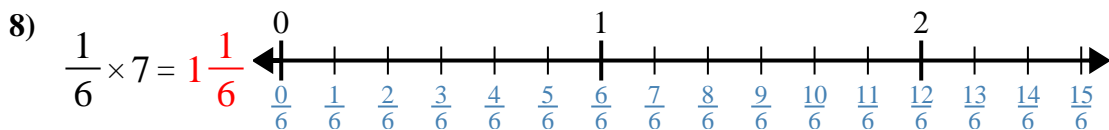
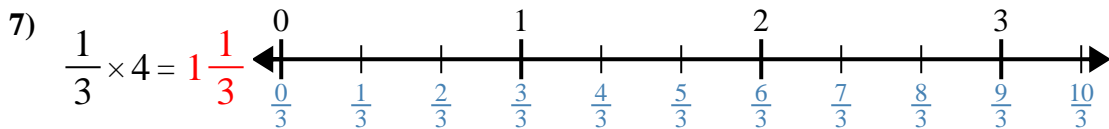
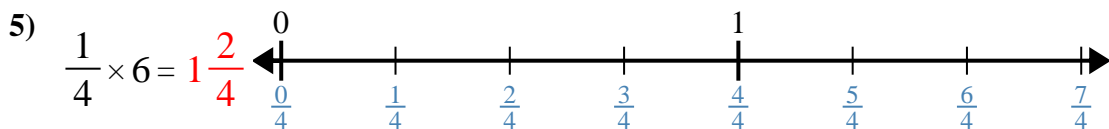
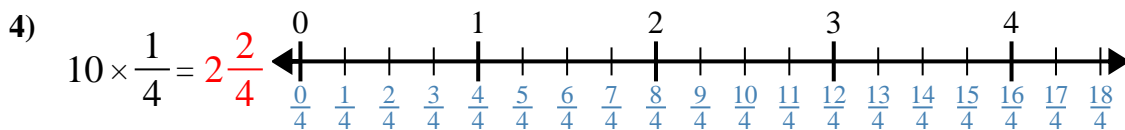
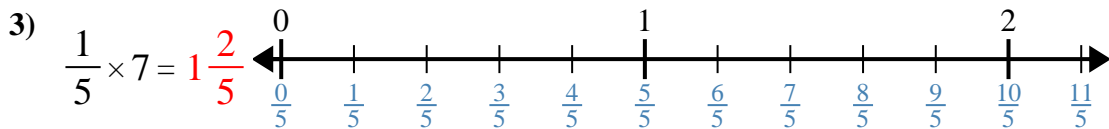
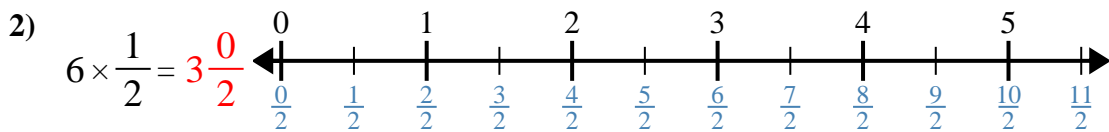
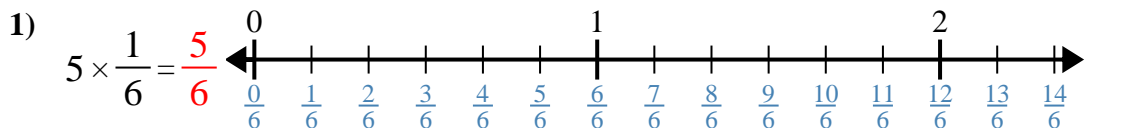
8. _____

9. _____

10. _____



Use the numberline to solve.



Answers

1. $\frac{5}{6}$

2. $3\frac{0}{2}$

3. $1\frac{2}{5}$

4. $2\frac{2}{4}$

5. $1\frac{2}{4}$

6. $2\frac{1}{2}$

7. $1\frac{1}{3}$

8. $1\frac{1}{6}$

9. $\frac{5}{10}$

10. $\frac{2}{8}$



Use the numberline to solve.

$1\frac{1}{3}$

$\frac{5}{10}$

$1\frac{2}{5}$

$1\frac{2}{4}$

$\frac{2}{8}$

$\frac{5}{6}$

$1\frac{1}{6}$

$3\frac{0}{2}$

$2\frac{2}{4}$

$2\frac{1}{2}$

Answers

1)

1. _____

2)

2. _____

3)

3. _____

4)

4. _____

5)

5. _____

6)

6. _____

7)

7. _____

8)

8. _____

9)

9. _____

10)

10. _____